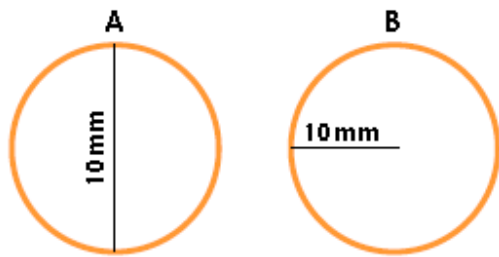


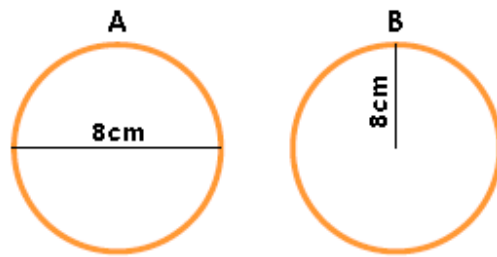
Mild

1a. Tick the circle which has a radius of 10mm.



VF

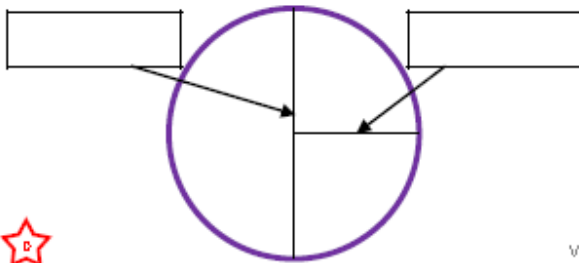
1b. Tick the circle which has a diameter of 8cm.



VF

2a. Use the measurements below to label the radius and diameter.

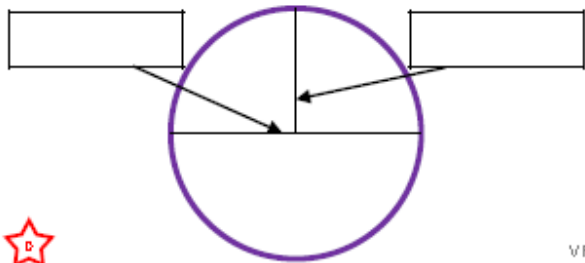
6cm 12cm



VF

2b. Use the measurements below to label the radius and diameter.

10mm 5mm



VF

3a. Match each diameter to its radius.

- | | |
|-----|----|
| 16m | 4m |
| 8m | 8m |
| 4m | 7m |
| 14m | 2m |



VF

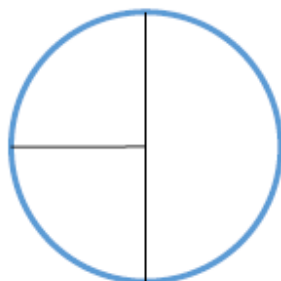
3b. Match each radius to its diameter.

- | | |
|-----|-----|
| 3m | 24m |
| 1m | 18m |
| 12m | 6m |
| 9m | 2m |



VF

4a. Use your ruler to measure the radius and diameter.



VF

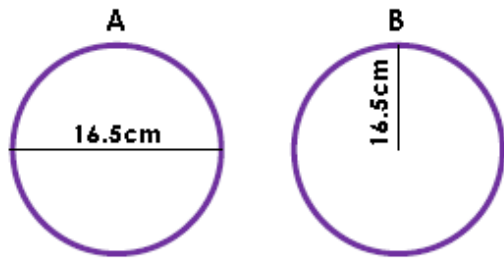
4b. Use your ruler to measure the radius and diameter.



VF

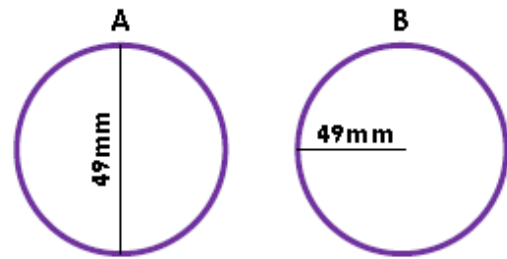
Hot

5a. Tick the circle which has a radius of 16.5cm.



VF

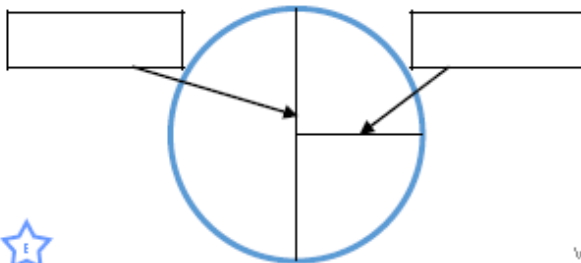
5b. Tick the circle which has a diameter of 49mm.



VF

6a. Use the measurements below to label the radius and diameter.

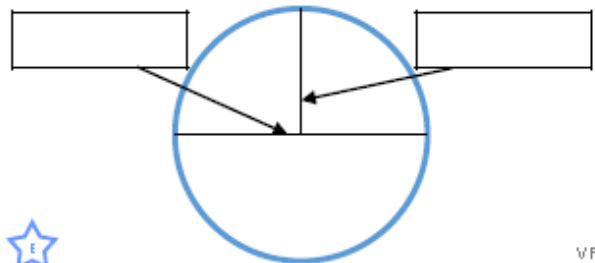
54mm 27mm



VF

6b. Use the measurements below to label the radius and diameter.

9.5cm 19cm



VF

7a. Match each diameter to its radius.

91m	43.5m
87m	37.5m
63m	45.5m
75m	31.5m



VF


7b. Match each radius to its diameter.

49.5m	107m
53.5m	99m
25.5m	83m
41.5m	51m




VF

8a. Use your ruler to draw and measure the radius and diameter.



VF

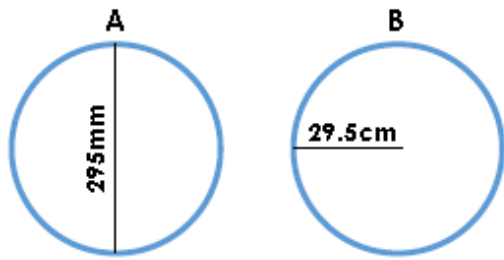
8b. Use your ruler to draw and measure the radius and diameter.



VF

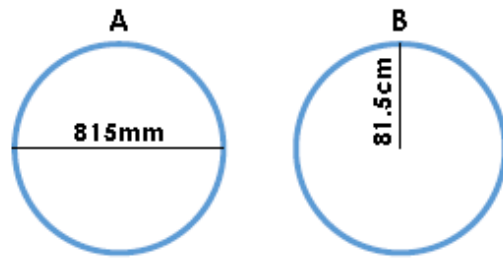
Spicy

9a. Tick the circle which has a radius of 295mm.



VF

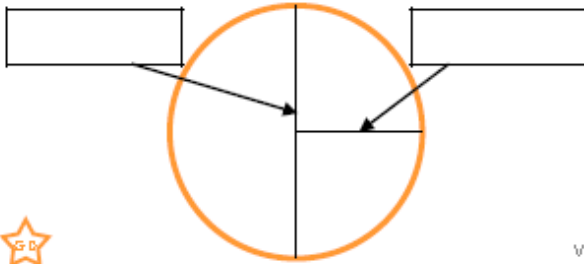
9b. Tick the circle which has a diameter of 81.5cm.



VF

10a. Use the measurements below to label the radius and diameter.

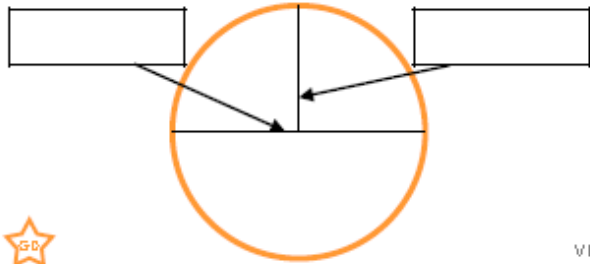
7.5m 375cm



VF

10b. Use the measurements below to label the radius and diameter.

0.9m 450mm



VF

11a. Match each diameter to its radius.

5m 675mm
 13.5cm 250cm
 94mm 850cm
 17m 4.7cm



VF


11b. Match each radius to its diameter.

35cm 83cm
 415mm 150cm
 0.75m 0.39m
 19.5cm 700mm




VF

12a. Use your ruler to draw and measure the radius and diameter.



VF

12b. Use your ruler to draw and measure the radius and diameter.



VF