

Number bonds to 10


I have 3 pencils in my pot. It fits 10.

How many more can fit in the pot?




There are 10 buttons on my coat.

I have fastened 2, how many more are there to do?




Tom has 4 apples, Jemma has 6.

How many apples are there in total?



I had 10 sweets but I gave 1 to Ben.


How many do I have left?



Dan has 10 cakes. He gives 2 to Ted.
how many cakes does Dan have left?



Fred has 8 bears, Sam has 2. How many
bears do they have altogether?



I can fit 10 dolls in my dolls house.
I only have 5 dolls, how many more
can fit in?



There are 10 pages in my book. I
read 3 of them. How many more
pages are left?



I have 6 fish in my bowl. There is room for 10. How many more fish can I buy?



I had 10 Moshi Monsters, but I lost 2. How many do I have left?

